



# 4, 8, 50 and 100 Missing Multiples


I can solve problems involving multiples.





1. Widow Twankey has been hanging the panto shirts out to dry. However, some of the numbers have mysteriously disappeared in the wash. Write the missing numbers on the shirts.

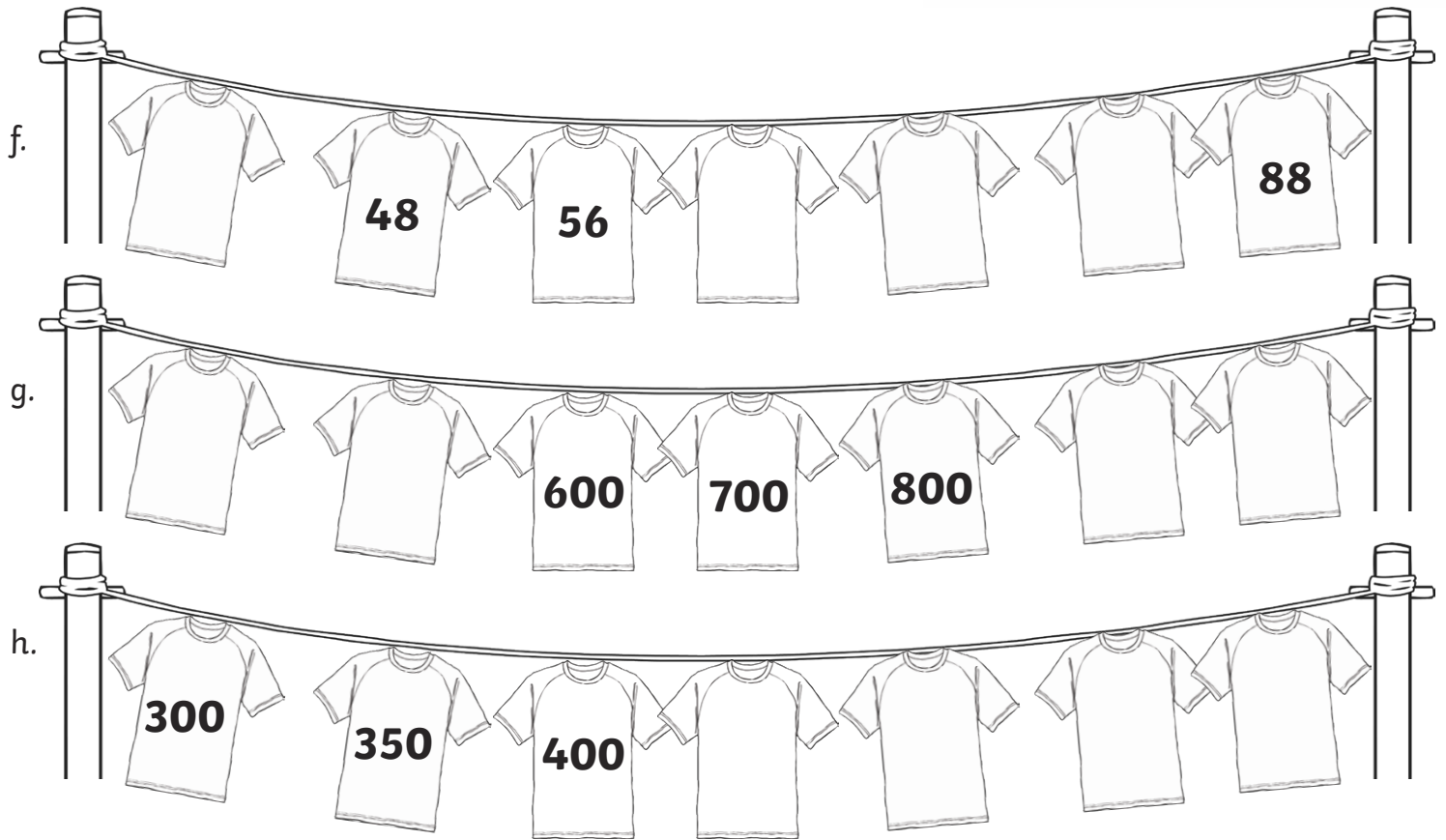
a. 

b. 

c. 

d. 


e. 



2. Widow Twankey has another load of washing. Can you sort the washing out for her?

Colour the multiples of:

4: green    8: blue    50: yellow    100: pink



# Answers

1. Widow Twankey has been hanging the panto shirts out to dry. However, some of the numbers have mysteriously disappeared in the wash. Write the missing numbers on the shirts.

a. 4, **8**, **12**, 16, 20, 24, **28**

b. 8, 16, **24**, **32**, 40, 48, 56

c. 50, **100**, **150**, 200, **250**, 300, 350

d. **100**, **200**, 300, 400, **500**, 600, **700**

e. **24**, **28**, 32, 36, 40, **44**, 48

f. **40**, 48, 56, **64**, **72**, **80**, 88

g. **400**, **500**, 600, 700, 800, **900**, **1000**

h. 300, 350, 400, **450**, **500**, **550**, **600**

2. Widow Twankey has another load of washing. Can you sort the washing out for her?

Colour the multiples of:

4: green    8: blue    50: yellow    100: pink

Multiples of 4 (green): 4, 12

Multiples of 4 and 8 (green and blue): 8, 16, 24

Multiples of 50 (yellow): 150, 550

Green, Yellow, Pink: 100

Green, Blue, Yellow, Pink: 200